





Use the array provided to solve each problem.

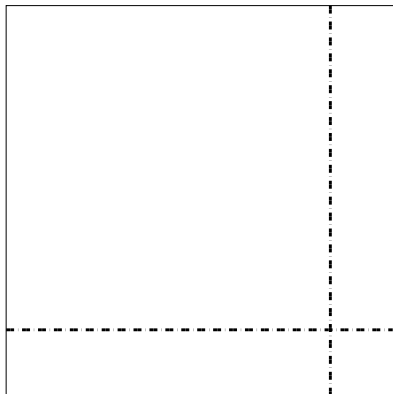
1) $43 \times 28 =$



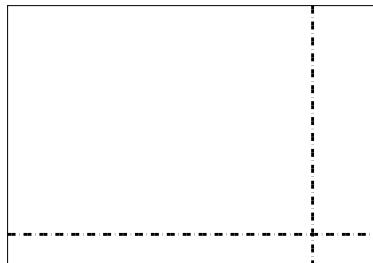
2) $37 \times 18 =$




3) $36 \times 36 =$




4) $34 \times 49 =$



5) $46 \times 54 =$



6) $44 \times 52 =$



Answers

1. _____

2. _____

3. _____

4. _____

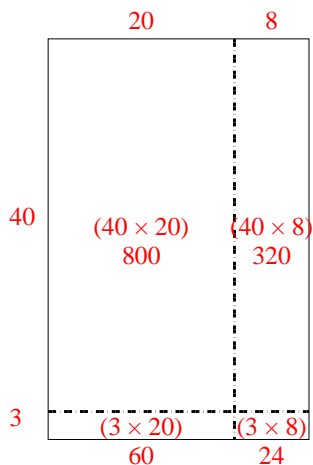
5. _____

6. _____

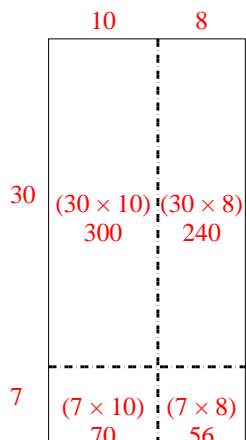


Use the array provided to solve each problem.

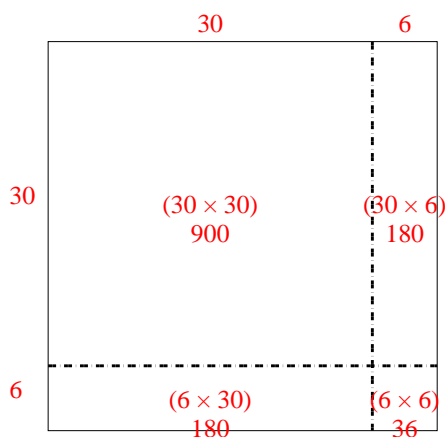
1) $43 \times 28 =$



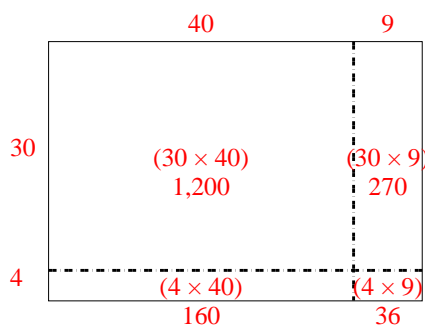
2) $37 \times 18 =$



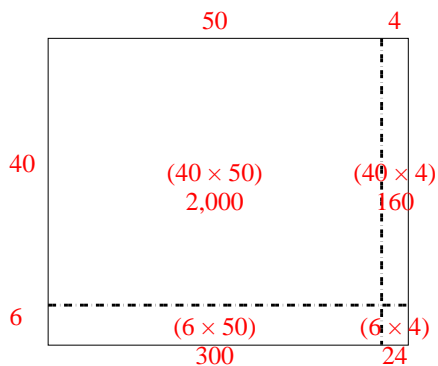
3) $36 \times 36 =$



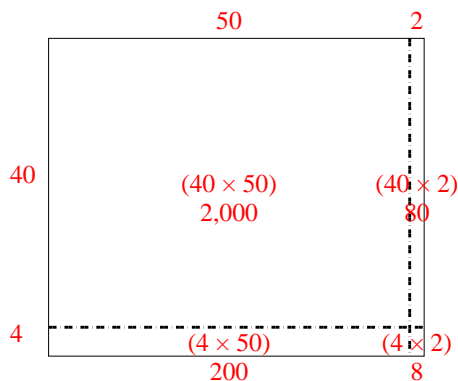
4) $34 \times 49 =$



5) $46 \times 54 =$



6) $44 \times 52 =$



Answers

1. 1,204

2. 666

3. 1,296

4. 1,666

5. 2,484

6. 2,288